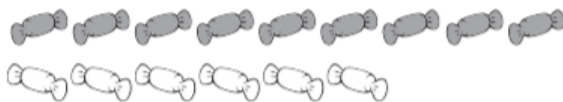


Writing Equations to show Comparisons (Part 2)

**1** How many sweets are there in total in each group?

Write two number sentences for each group to show this.


**a)**



□ ○ □ ○ □

□ ○ □ ○ □


**b)**



□ ○ □ ○ □

□ ○ □ ○ □

**2** Aman has 12  and Ivy has 7 .



Make up an addition question about Aman and Ivy.

---

□ ○ □ ○ □

Make up a subtraction question.

---

□ ○ □ ○ □