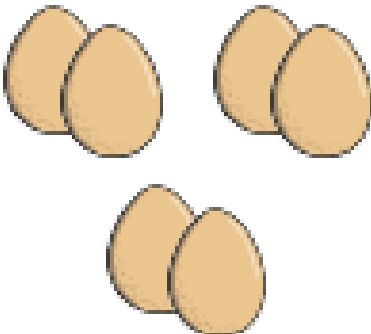





Use the spring pictures to complete the sentences and the calculations.

	<p>There are <input type="text"/> altogether.</p> <p>There are <input type="text"/> groups.</p> <p>There are <input type="text"/> in each group.</p>	$\text{○} \div \text{○} = \text{○}$ $\text{○} \times \text{○} = \text{○}$
	<p>There are <input type="text"/> altogether.</p> <p>There are <input type="text"/> groups.</p> <p>There are <input type="text"/> in each group.</p>	$\text{○} \div \text{○} = \text{○}$ $\text{○} \times \text{○} = \text{○}$
	<p>There are <input type="text"/> altogether.</p> <p>There are <input type="text"/> groups.</p> <p>There are <input type="text"/> in each group.</p>	$\text{○} \div \text{○} = \text{○}$ $\text{○} \times \text{○} = \text{○}$
	<p>There are <input type="text"/> altogether.</p> <p>There are <input type="text"/> groups.</p> <p>There are <input type="text"/> in each group.</p>	$\text{○} \div \text{○} = \text{○}$ $\text{○} \times \text{○} = \text{○}$