





Kim has read $\frac{6}{7}$ of her book.

Tom has read $\frac{2}{7}$ of his book.

a) Shade the bar models to represent this information.



b) How much more has Kim read than Tom?

Kim has read more of her book than Tom.

Write the missing numerators.

a) $\frac{7}{10} - \frac{1}{10} = \boxed{}$

a) $\frac{8}{9} - \frac{\boxed{}}{9} = \frac{7}{9}$

e) $\frac{7}{10} - \frac{5}{10} = \frac{1}{10} + \frac{\boxed{}}{10}$

b) $\frac{7}{10} - \frac{2}{10} = \boxed{}$

b) $\frac{5}{11} - \frac{\boxed{}}{11} = \frac{4}{11}$

f) $\frac{\boxed{}}{4} - \frac{1}{4} = \frac{1}{4} + \frac{1}{4}$

c) $\frac{7}{10} - \frac{3}{10} = \boxed{}$

c) $\frac{8}{9} - \frac{\boxed{}}{9} = \frac{3}{9} + \frac{4}{9}$

g) $\frac{\boxed{}}{5} - \frac{2}{5} = \frac{1}{5} + \frac{2}{5}$

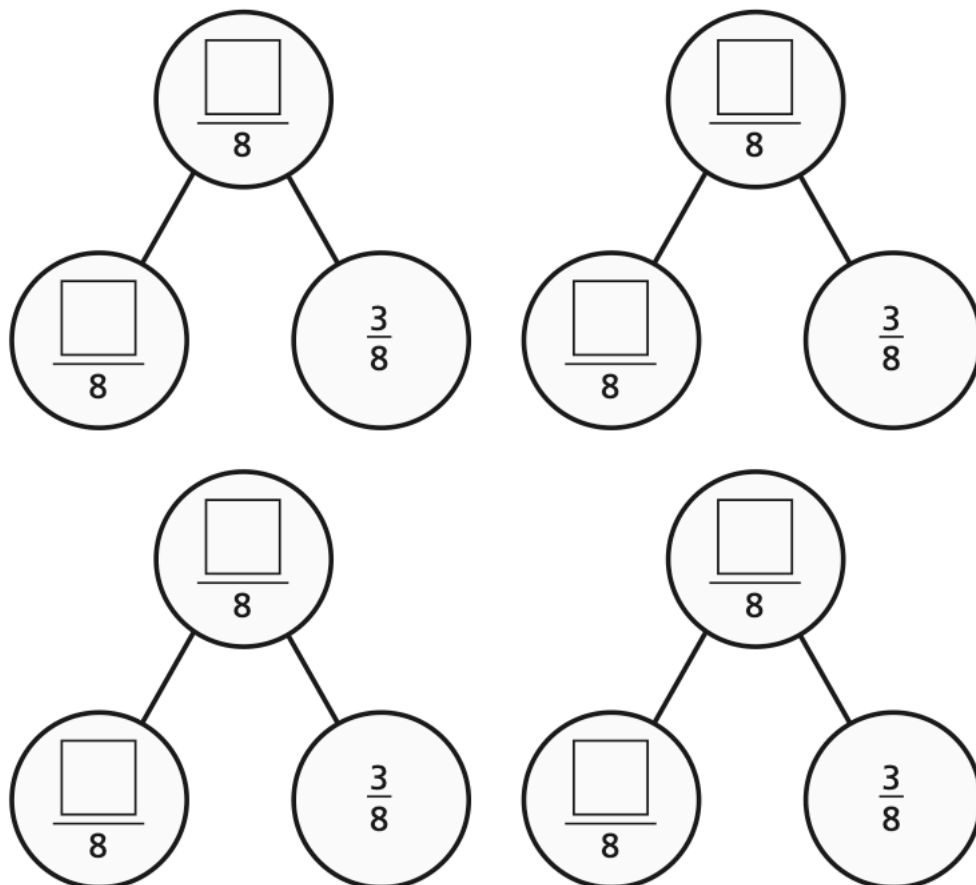
d) $\frac{7}{12} - \frac{3}{12} = \boxed{}$

d) $\frac{7}{9} - \frac{5}{9} = \frac{\boxed{}}{9} - \frac{4}{9}$

h) $\frac{4}{5} + \frac{1}{5} = \frac{3}{7} - \frac{2}{7} + \frac{\boxed{}}{7}$

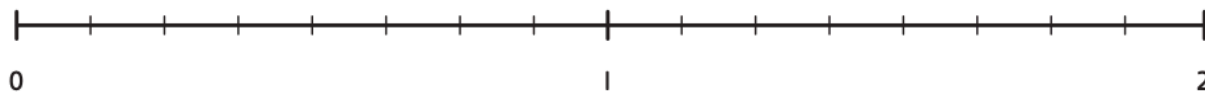


Complete the part-whole model in four different ways.

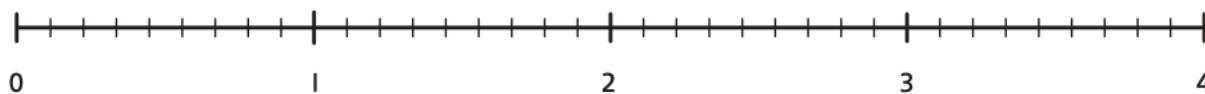


Complete each calculation.

a) $1\frac{7}{8} - \frac{3}{8} =$





b) $= 3\frac{1}{q} - \frac{5}{q}$





Complete the table to show three possible values of the square and triangle.

$$\frac{\triangle}{92} - \frac{\square}{92} = \frac{13}{92}$$

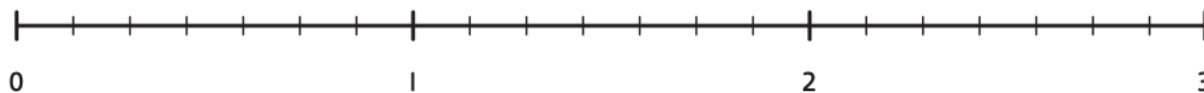
	

How many other answers can you find?



Millie has $2\frac{5}{7}$ litres of juice. Each day Millie drinks $\frac{6}{7}$ of a litre of juice.

a) How many days will the juice last?



Millie has enough juice for days.

b) How much juice is left over?

There is of a litre of juice left over.