



Comparing sets using 'More' and 'Fewer'.



I need to find the number of  in the sky and then the number of  in the tree.

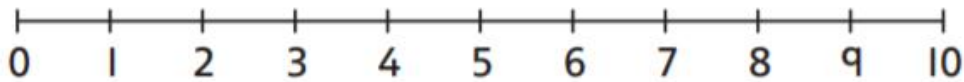



- 1** a) What can you see in the picture?
Count the different animals.

- b) How many fewer  are in the tree than in the sky?



- 2 a) How many more  are in the water than on the bank?



There are more 
in the water than
on the bank.

- 3 What stories do these number sentences tell?


Talk to a partner.

a)



$$8 + 6 = 14$$

b)



$$11 - 4 = 7$$