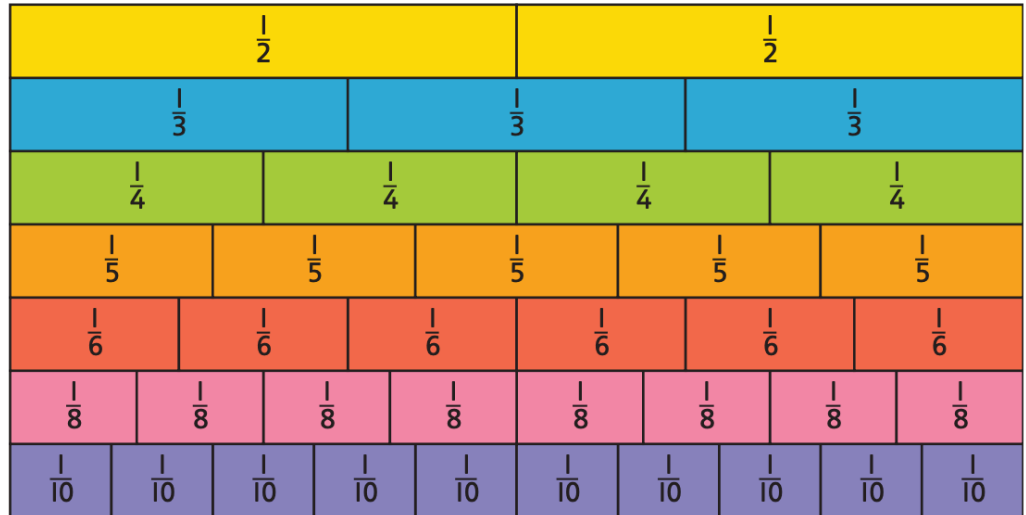
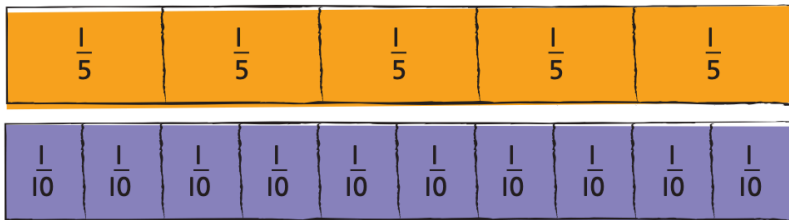




Write down the fractions equivalent to $\frac{1}{2}$. How many can you find?



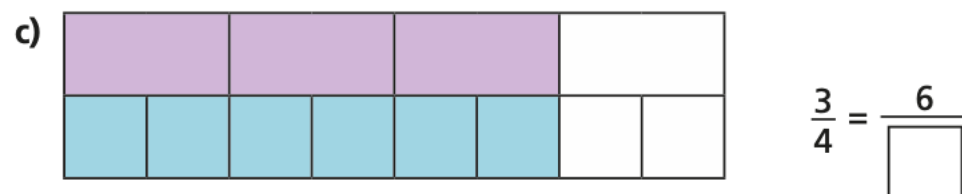
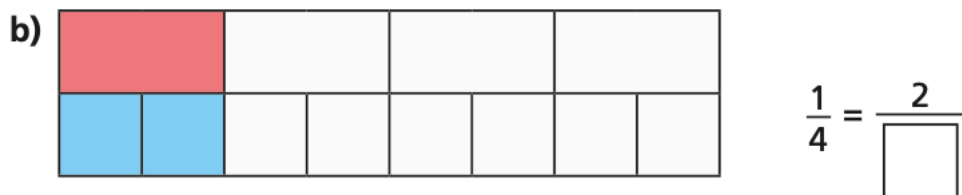
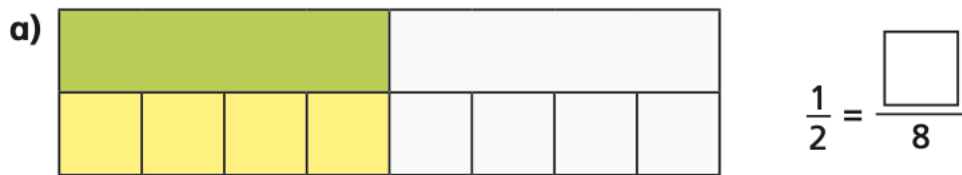
Which of the following statements are true and which are false?



$\frac{2}{10}$ is the same as $\frac{1}{5}$. This is true / false

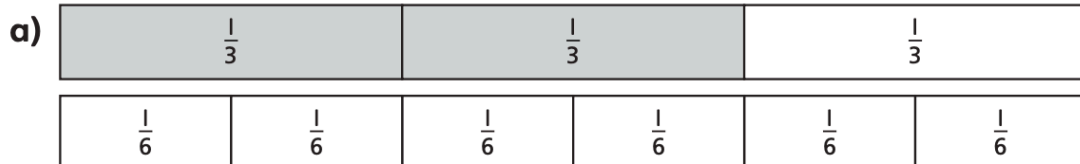
because _____.

Complete the equivalent fractions.

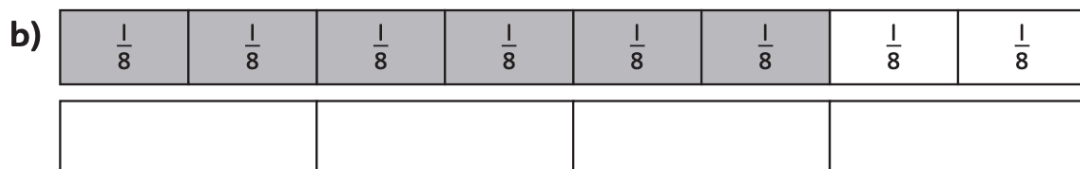




Write down the equivalent fractions.



$$\frac{2}{3} = \frac{\boxed{}}{6}$$



$$\frac{\boxed{}}{\boxed{}} = \frac{\boxed{}}{\boxed{}}$$




Lee says that he has shown the same fraction as Zac because they have both coloured in 3 sections of their strips.



Lee

Zac



Do you agree? Explain how you know.


The bar models represent fractions.




A



C



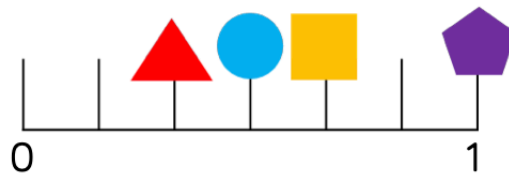
B



D

Which is the odd one out? _____

Why do you think this?



Use the clues to work out which fraction is being described for each shape.

- My denominator is 6 and my numerator is half of my denominator.
- I am equivalent to $\frac{4}{12}$
- I am equivalent to one whole
- I am equivalent to $\frac{2}{3}$

Can you write what fraction each shape is worth? Can you record an equivalent fraction for each one?

 =

 =

 =

 =