



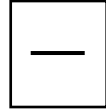


Identifying fractions of quantity and shape (Part 2)

What fraction of the shapes below are shaded?





Stevie has 20 cars.

Can you find $\frac{1}{2}$ and $\frac{1}{4}$ of them?

Use cubes and plates or drawings.

