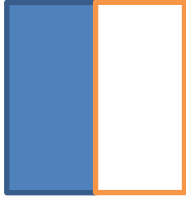


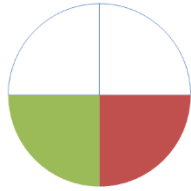
Identifying fractions of quantity and shape

A: What fraction of the shape is shaded?


1.



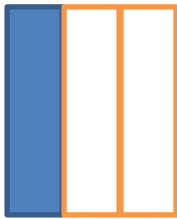
2.



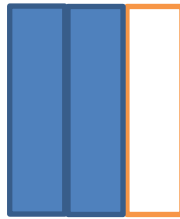
3.



4.

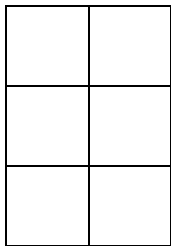


5.

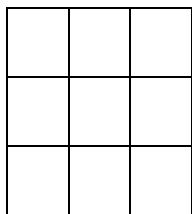


B: Can you shade these shapes to represent the fraction?

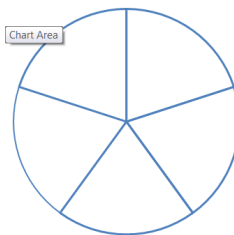
1. Color $\frac{1}{2}$



2. Color $\frac{1}{3}$



3. Color $\frac{1}{5}$



C: Find a fraction of these numbers

1. What is $\frac{1}{2}$ of 12?

2. What is $\frac{1}{4}$ of 20?