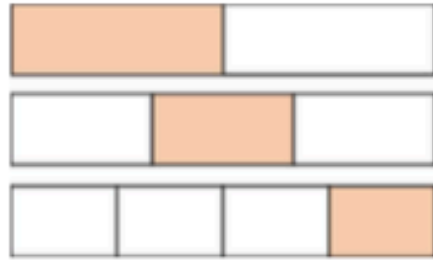
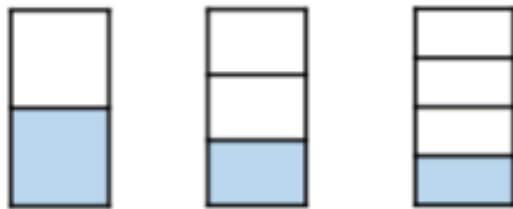


1. What is the same and what is different about each bar model?




2. What fraction is shaded in each diagram?




What do you notice? Complete the sentence.

The _____ the denominator the _____ the fraction.

3. Match the unit fraction to the correct picture.



$$\frac{1}{4}$$

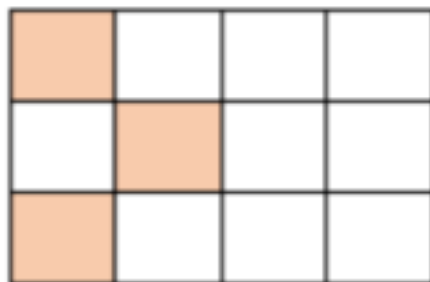


$$\frac{1}{3}$$

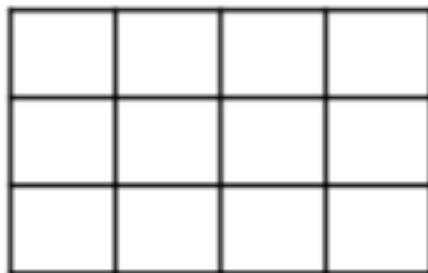


$$\frac{1}{2}$$

4. This shows $\frac{1}{4}$



Can you shade the same shape so that it shows $\frac{1}{3}$?



5. I am thinking of a number.



One third of my number is 12

Which will be greater, one half of my number or one quarter of my number?

Use cubes or a bar model to prove your answer.

Workout Here: