

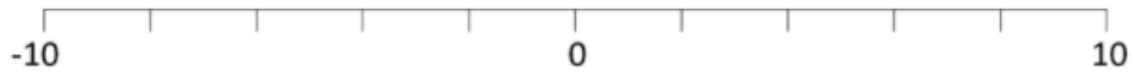
Section A

1) $-4 + 5 =$

3) $-7 + 12 =$

2) $-3 + 6 =$

4) $-14 + 4 =$



Section B

1) $-8 + 10 =$

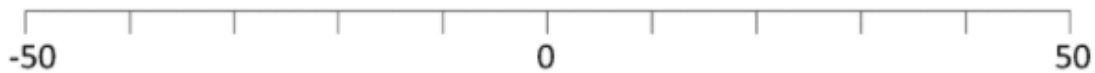
3) $-10 + 20 =$

5) $14 + - 7 =$

2) $-24 + 30 =$

4) $-23 + 23 =$

6) $21 + - 18 =$



Section c

1) $-12 + 10 =$

3) $20 + - 20 =$

5) $56 + - 21 =$

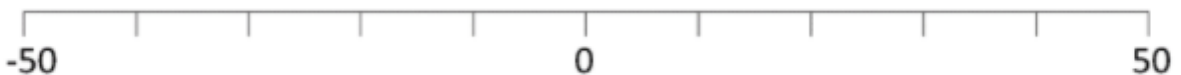
7) $-24 + ? = -8$

2) $-31 + 30 =$

4) $- 24 + - 23 =$

6) $-33 + - 18 =$

8) $-71 + ? = 4$



)

