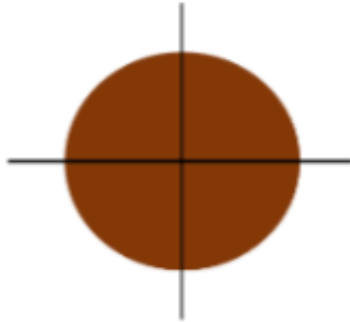


1.

Four friends are sharing a cake.



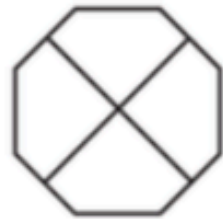
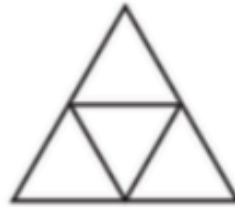


The cake is split into ____ equal parts.

Each part is worth a _____.

This can be written as $\frac{\square}{\square}$

2.

Shade $\frac{1}{4}$ of each shape.



3.

Shade $\frac{1}{3}$ of each shape.



4.

Which shapes represent one third?



Explain why the other circles do not represent one third.

5.

Who has more? Explain why.



Rosie

I have $\frac{1}{4}$ of £8



Whitney

I have $\frac{1}{2}$ of £6

Explain Why:

6.

Dora says,



I have one third of a pizza because I have one slice and there are three slices left.

Do you agree? Explain your reasoning.

Explain Why: