





How many plants are there in total?




$$\square \bigcirc \square = \square$$

There are plants.

30 flowers are shared equally between the 5 vases.



30



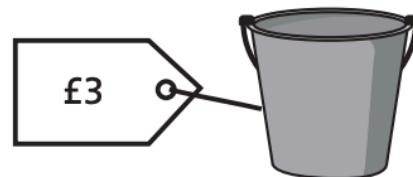
$$\square \bigcirc \square = \square$$

There are flowers in each vase.

a) How much do 7 buckets cost altogether?

$$\square \bigcirc \square = \square$$

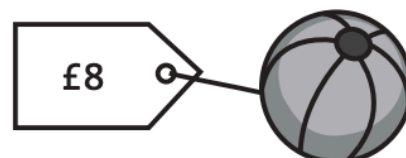
7 buckets cost £ .



b) How many beach balls can you buy with £40?

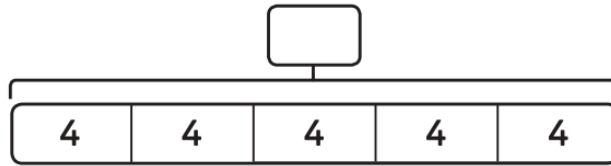
$$\square \bigcirc \square = \square$$

You can buy beach balls.





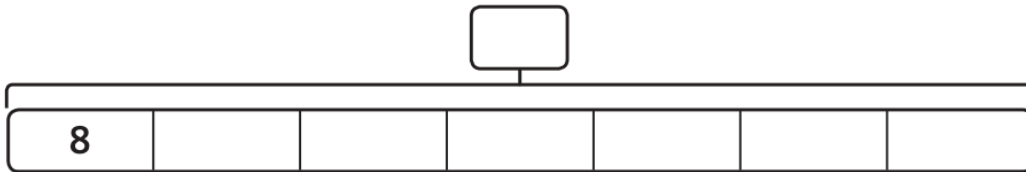

a) What is the total score?



$$\square \times \square = \square$$

The total score is .


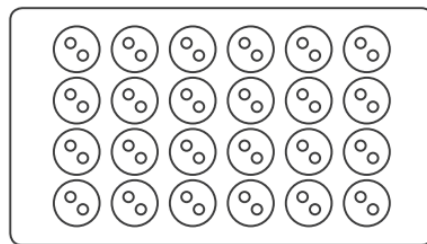
b) How many rulers are there?



$$\square \circ \square = \square$$

There are rulers.

These buttons are put into bags of 8.




How many bags are needed?

$$\square \circ \square = \square$$

bags are needed.

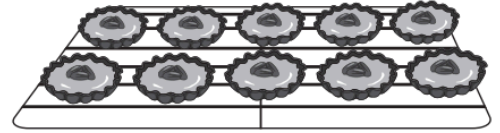


a) How many jam tarts are on each tray?



$$\square \times \square = \square$$

There are jam tarts.



$$\square \times \square = \square$$

There are jam tarts.

b) How many jam tarts are there in total?

$$\square + \square = \square$$

There are jam tarts in total.