

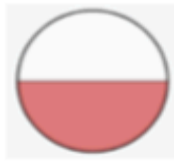
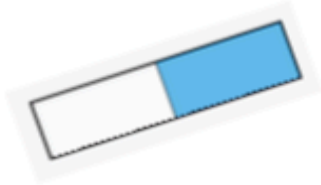
1. The whole gummy bear is split into ____ equal parts.

Each part is worth a _____.

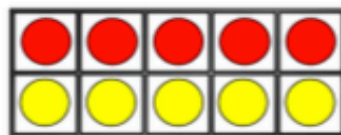

This can be written as $\frac{\square}{\square}$




2. Which pictures show $\frac{1}{2}$?



3. Which pictures show $\frac{1}{2}$?



4. Rosie says the shaded part of the shape does not show a half because there are four parts, not two equal parts.



Explain your answer here:

Do you agree? Explain why.