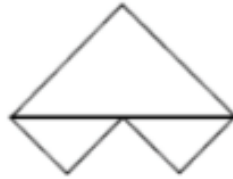
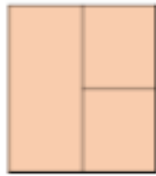


1. Look at the representations. Decide which show equal parts and which show unequal parts.




2. Can you split the teddies into three equal groups?
Can you split the teddies into three unequal groups?



How many ways can you split the teddies into equal parts?
Be systematic in your approach.

3. How many different ways can you put these beanbags into equal groups?



Show your working out here: