

Reading and writing the time to o'clock (Part 1)

1

Match the times to the clocks.

12 o'clock



8 o'clock




1 o'clock

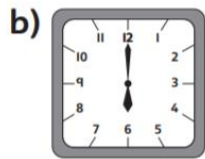


2

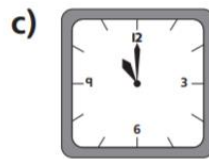
What time is it?



o'clock



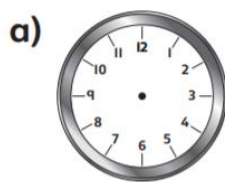
o'clock



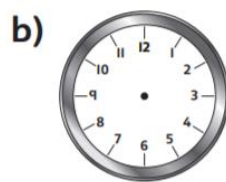
o'clock

3

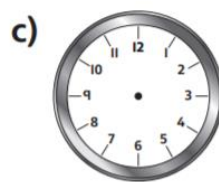
Draw the times.



10 o'clock



2 o'clock



7 o'clock

Reflect

A clock shows 4 o'clock.

Draw it.

