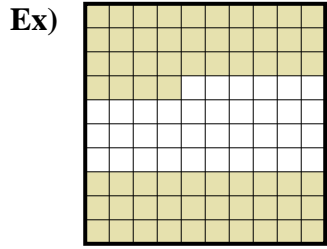
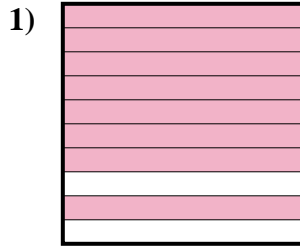




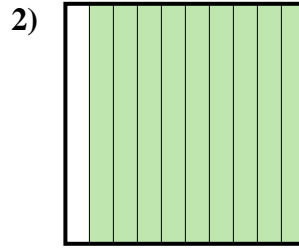
Determine the value written as a fraction , decimal & a percent.



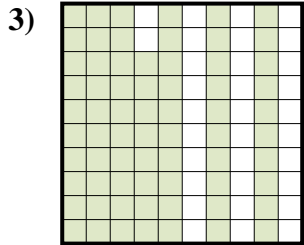
Fraction  $\frac{64}{100}$   
 Decimal 0.64  
 Percent 64%



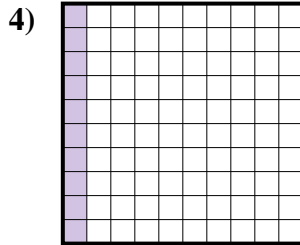
Fraction \_\_\_\_\_  
 Decimal \_\_\_\_\_  
 Percent \_\_\_\_\_



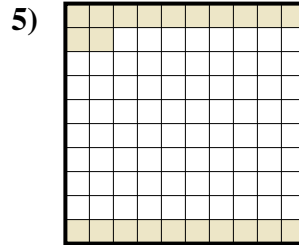
Fraction \_\_\_\_\_  
 Decimal \_\_\_\_\_  
 Percent \_\_\_\_\_



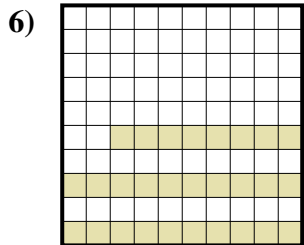
Fraction \_\_\_\_\_  
 Decimal \_\_\_\_\_  
 Percent \_\_\_\_\_



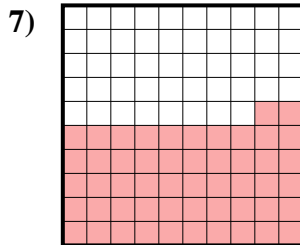
Fraction \_\_\_\_\_  
 Decimal \_\_\_\_\_  
 Percent \_\_\_\_\_



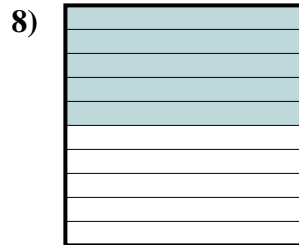
Fraction \_\_\_\_\_  
 Decimal \_\_\_\_\_  
 Percent \_\_\_\_\_



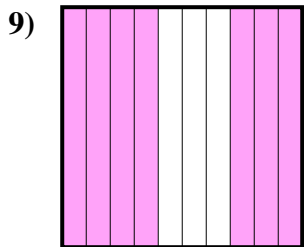
Fraction \_\_\_\_\_  
 Decimal \_\_\_\_\_  
 Percent \_\_\_\_\_



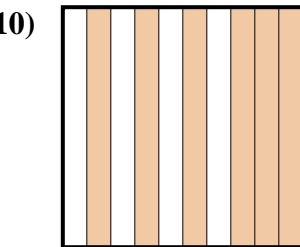
Fraction \_\_\_\_\_  
 Decimal \_\_\_\_\_  
 Percent \_\_\_\_\_



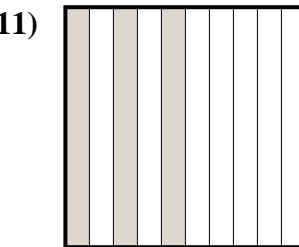
Fraction \_\_\_\_\_  
 Decimal \_\_\_\_\_  
 Percent \_\_\_\_\_



Fraction \_\_\_\_\_  
 Decimal \_\_\_\_\_  
 Percent \_\_\_\_\_



Fraction \_\_\_\_\_  
 Decimal \_\_\_\_\_  
 Percent \_\_\_\_\_



Fraction \_\_\_\_\_  
 Decimal \_\_\_\_\_  
 Percent \_\_\_\_\_

**Answers**

Ex.  $\frac{64}{100}$  0.64 64%

1. \_\_\_\_\_

2. \_\_\_\_\_

3. \_\_\_\_\_

4. \_\_\_\_\_

5. \_\_\_\_\_

6. \_\_\_\_\_

7. \_\_\_\_\_

8. \_\_\_\_\_

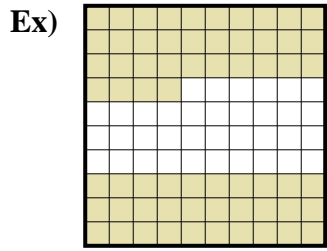
9. \_\_\_\_\_

10. \_\_\_\_\_

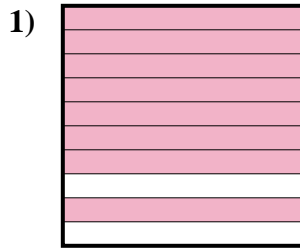
11. \_\_\_\_\_



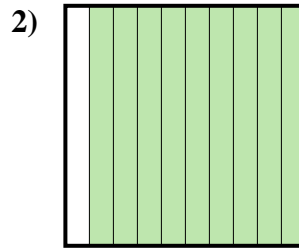
Determine the value written as a fraction , decimal & a percent.



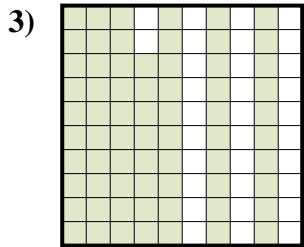
Fraction  $\frac{64}{100}$   
 Decimal  $0.64$   
 Percent  $64\%$



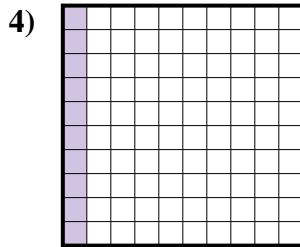
Fraction  $\frac{8}{10}$   
 Decimal  $0.8$   
 Percent  $80\%$



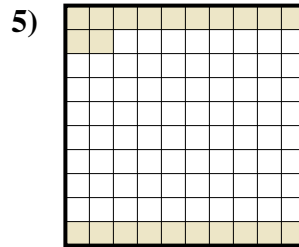
Fraction  $\frac{9}{10}$   
 Decimal  $0.9$   
 Percent  $90\%$



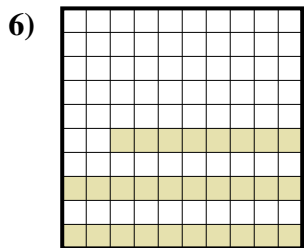
Fraction  $\frac{68}{100}$   
 Decimal  $0.68$   
 Percent  $68\%$



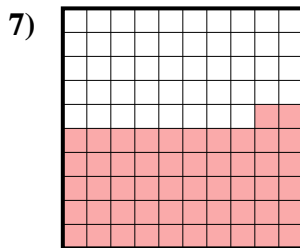
Fraction  $\frac{10}{100}$   
 Decimal  $0.10$   
 Percent  $10\%$




Fraction  $\frac{22}{100}$   
 Decimal  $0.22$   
 Percent  $22\%$



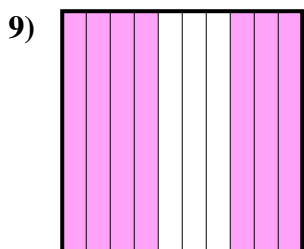
Fraction  $\frac{28}{100}$   
 Decimal  $0.28$   
 Percent  $28\%$



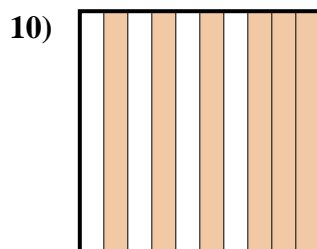
Fraction  $\frac{52}{100}$   
 Decimal  $0.52$   
 Percent  $52\%$



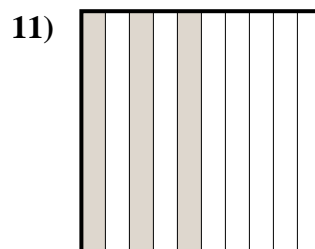
Fraction  $\frac{5}{10}$   
 Decimal  $0.5$   
 Percent  $50\%$



Fraction  $\frac{7}{10}$   
 Decimal  $0.7$   
 Percent  $70\%$



Fraction  $\frac{6}{10}$   
 Decimal  $0.6$   
 Percent  $60\%$



Fraction  $\frac{3}{10}$   
 Decimal  $0.3$   
 Percent  $30\%$

**Answers**

- Ex.  $\frac{64}{100}$   $0.64$   $64\%$
1.  $\frac{8}{10}$   $0.8$   $80\%$
2.  $\frac{9}{10}$   $0.9$   $90\%$
3.  $\frac{68}{100}$   $0.68$   $68\%$
4.  $\frac{10}{100}$   $0.10$   $10\%$
5.  $\frac{22}{100}$   $0.22$   $22\%$
6.  $\frac{28}{100}$   $0.28$   $28\%$
7.  $\frac{52}{100}$   $0.52$   $52\%$
8.  $\frac{5}{10}$   $0.5$   $50\%$
9.  $\frac{7}{10}$   $0.7$   $70\%$
10.  $\frac{6}{10}$   $0.6$   $60\%$
11.  $\frac{3}{10}$   $0.3$   $30\%$