

2, 5 and 10s Arrays

Arrays are pictures that help us see numbers. Number sentences are shown with dots and arranged into rows and columns.


Here is an example:




3	+	3	=	6
2	×	3	=	6

1. Write the multiplication calculation and repeated addition for each array.

2×2



4×2

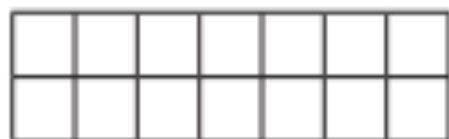


5×2



2. Write the multiplication calculation and repeated addition for each array.

$— \times —$



$— \times —$

