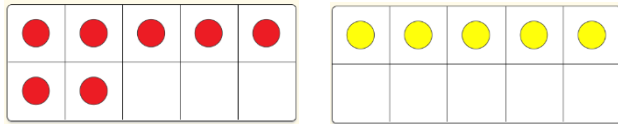


To use the 'Make 10' strategy and add 1-digit numbers (part 2)

1

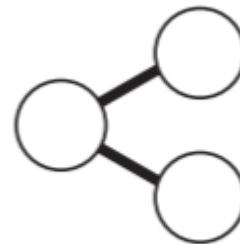
Work out $7 + 5$.Use the

 to help you.

$7 + \square = 10$

$10 + \square = \square$

$\square + \square = \square$



First, I need to work out what makes 10.



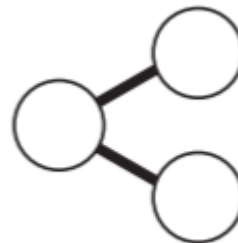
2

Work out $4 + 9$.

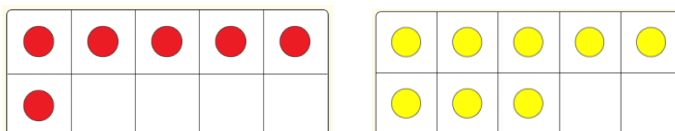
$\square + \square = 10$

$10 + \square = \square$

$\square + \square = \square$



3

Work out $6 + 8$.

$\square + \square = 10$

$10 + \square = \square$

$\square + \square = \square$

