



# Fluency




## Understand percentages

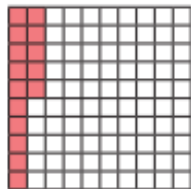
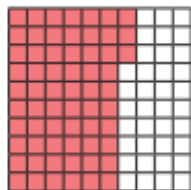

1 Complete the sentence for each diagram.

a)  There are  parts out of a hundred shaded.  
This is  %.


b)  There are  parts out of a hundred shaded.  
This is  %.

c)  There are  parts out of a hundred shaded.  
This is  %.

2 Complete the table.

Hundred square	Percentage
	
	
	82%

3 Shade 15% of the hundred square red.  
Shade 32% of the hundred square blue.



What percentage of the hundred square is not shaded?  %

