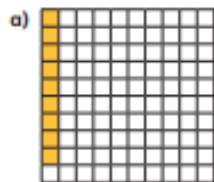


Fluency

Understand percentages

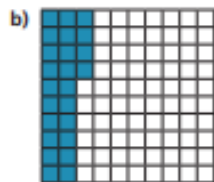


1 Complete the sentence for each diagram.



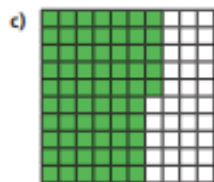
There are parts out of a hundred shaded.

This is %.



There are parts out of a hundred shaded.

This is %.



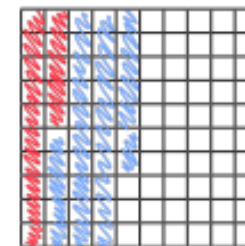
There are parts out of a hundred shaded.

This is %.

2 Complete the table.

Hundred square	Percentage
	15%
	63%
	82%

3 Shade 15% of the hundred square red.
Shade 32% of the hundred square blue.



What percentage of the hundred square is not shaded? %

