


Complete:



There are ___ equal groups with ___ in each group.

There are ___ 3s.

___ + ___ = 6

Complete:




There are ___ equal groups with ___ in each group.

There are three ___s.

___ + ___ + ___ = 12

Complete the table.


	Draw It	Say It	Add It
---	---------	--------	--------

True or False?

$$5 + 5 = 2 + 2 + 2 + 2 + 2$$

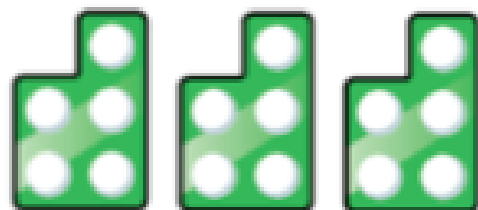
Draw an image or use cubes to help you explain your answer.

Which one does not belong?



Two 5s

$$5 + 5$$



Ten

