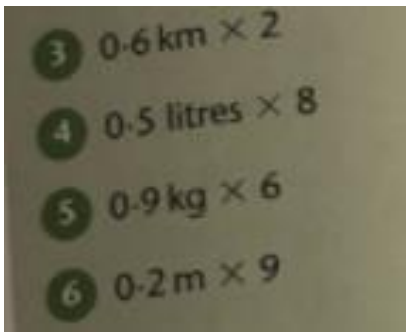
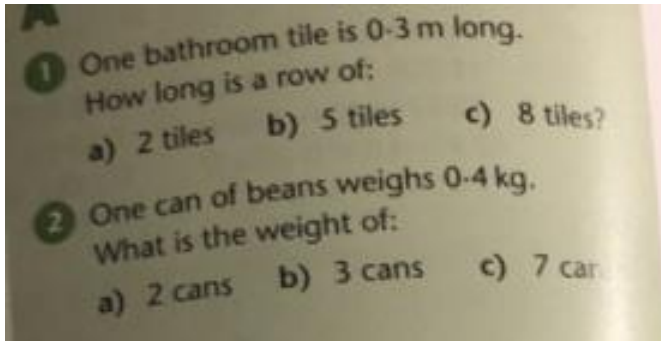


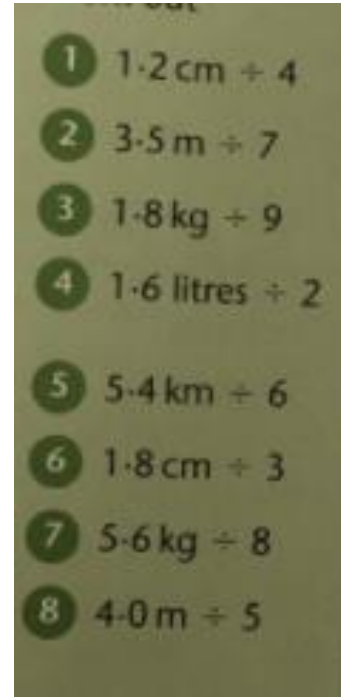
FLUENCY

Complete 4 questions from each section and check if you have gotten them correct. If you are still struggling, re-watch the video and try another few questions. If you are still struggling, please e-mail your teacher for assistance.

A



B



=

PROBLEM SOLVING

1. Pencils cost a school £0.05 each. A box holds 12 pencils. How much does one box cost the school?



2. A set of miniature gauge railway track contains 10 pieces that are 0.3m long. How long would the railway be when all the pieces of track are put together?



3. A shop buys a box of 50 mini chocolate bars from a wholesaler for £0.02 each. How much does the box cost?



4. Small boxes of sultanas weigh 0.06kg each. How much will 20 boxes weigh?

