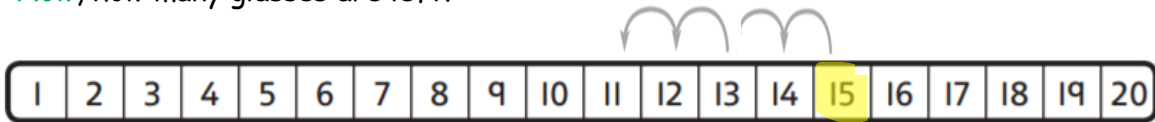


To Subtract by Counting Back Using a Number Line

1

First Hanna has 15 . Then she drinks 4 .

Now, how many glasses are left?

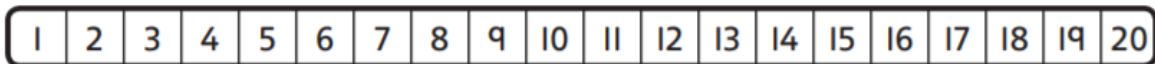


$$\square - \square = \square$$

2

First Ned has 18 . Then he eats 5 .

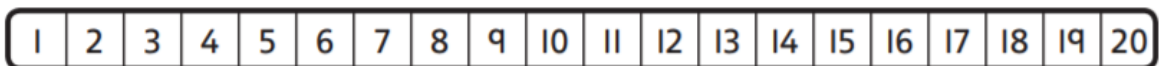
Now, how many bananas does he have left?



$$\square - \square = \square$$

3

Complete these number sentences using the number track.



a) $9 - 5 = \square$

$19 - 5 = \square$

c) $\square - 0 = 5$

$\square - 0 = 15$

b) $6 - \square = 2$

$16 - \square = 12$

d) $17 - \square = 12$

$\square - 7 = 11$