



Adding By Counting On Using a Number Line

1

First there are 8  in a hole.Then 5  more run into the hole.

Now, how many rabbits are there in the hole?



$$\boxed{8} + \boxed{5} = \boxed{\phantom{00}}$$

2

First there 8  in a pot. Then Hamda adds 3 more .

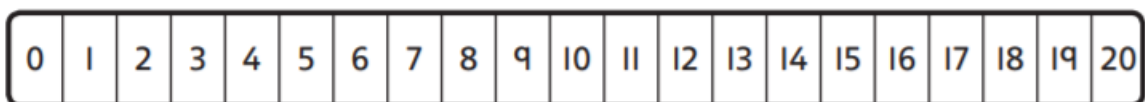
Now, how many pencils are in the pot?



$$\boxed{\phantom{00}} + \boxed{\phantom{00}} = \boxed{\phantom{00}}$$

3

Complete these additions.



a)  $10 + 3 = \boxed{\phantom{00}}$

f)  $8 + 4 = \boxed{\phantom{00}}$

b)  $11 + 3 = \boxed{\phantom{00}}$

g)  $4 + 8 = \boxed{\phantom{00}}$

c)  $14 + 5 = \boxed{\phantom{00}}$

h)  $2 + 5 = \boxed{\phantom{00}}$